

SJL

1. V slovách zakrúžkuj písmeno V, v

váza káva Lívia Viktor kvet svet

voda vietor sviečka spev Vanesa

2. Čítaj!

J mV o v A M j O s

Va Vo Ve Vi Vu vo vi ve vu

3. Precvič si písanie V, v! (písaným písmom)

V _____

V _____

V _____

v _____

v _____

v _____

MAT

1. Dopln chýbajúce čísla

1, __, __, 4, __, __, __, 8, 9, __

2. Precvič si písanie čísla 7

7 _____

7 _____

7 _____

7 _____

3. Vypočítaj!

$6 + 1 = \underline{\quad}$

$4 + 3 = \underline{\quad}$

$6 - 1 = \underline{\quad}$

$2 - 1 = \underline{\quad}$

$3 + 4 = \underline{\quad}$

$2 + 5 = \underline{\quad}$

$4 - 2 = \underline{\quad}$

$6 - 3 = \underline{\quad}$

$5 + 2 = \underline{\quad}$

$1 + 6 = \underline{\quad}$

$5 - 3 = \underline{\quad}$

$4 - 3 = \underline{\quad}$

$7 + 0 = \underline{\quad}$

$0 + 7 = \underline{\quad}$

$3 - 2 = \underline{\quad}$

$5 - 2 = \underline{\quad}$

4. Porovnaj čísla!

$7 \underline{\quad} 2$

$3 \underline{\quad} 7$

$6 \underline{\quad} 7$

$5 \underline{\quad} 4$

$4 \underline{\quad} 7$

$2 \underline{\quad} 2$

$7 \underline{\quad} 1$

$6 \underline{\quad} 3$

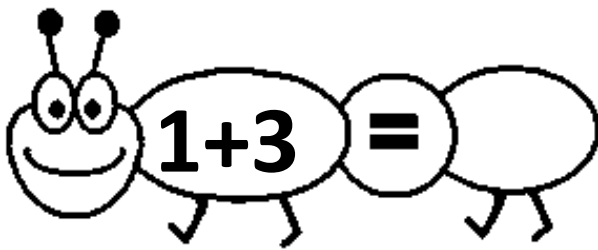
$0 \underline{\quad} 7$

$7 \underline{\quad} 7$

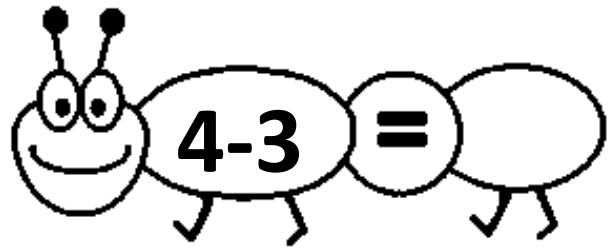
$7 \underline{\quad} 5$

$4 \underline{\quad} 0$

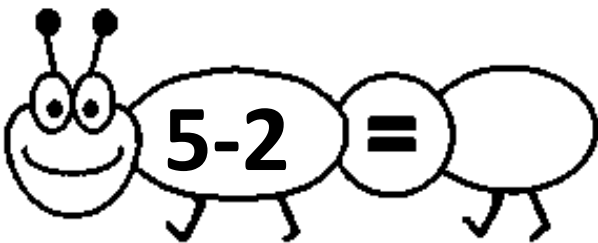
Opakovanie



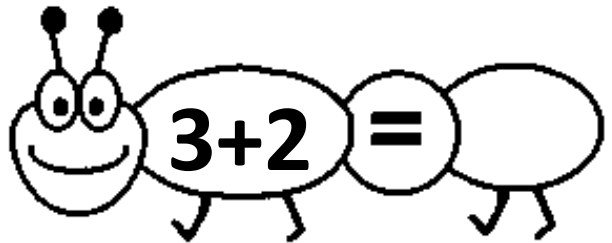
$1+3 = \square$



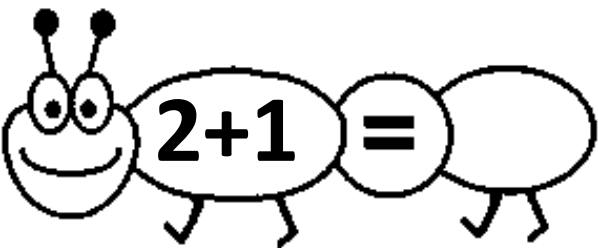
$4-3 = \square$



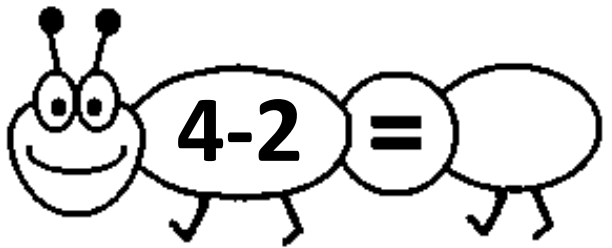
$5-2 = \square$



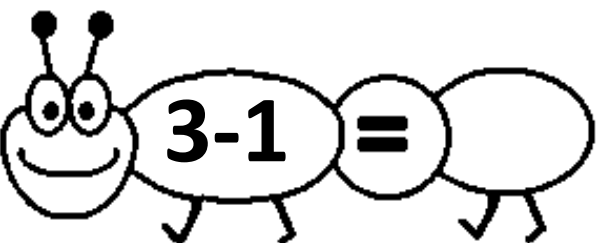
$3+2 = \square$



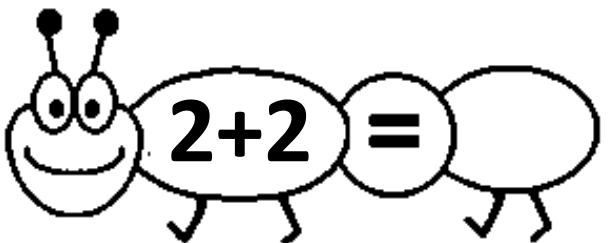
$2+1 = \square$




$4-2 = \square$



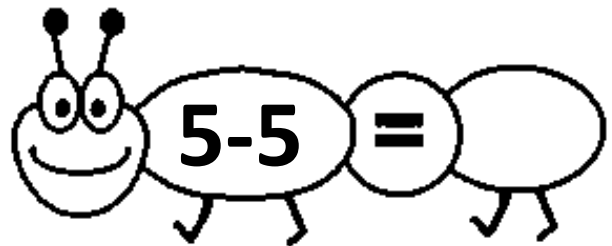
$3-1 = \square$




$2+2 = \square$



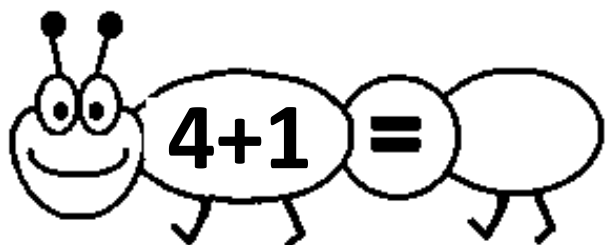
$4+1 = \square$



$5-5 = \square$



$5-4 = \square$



$4+1 = \square$